


NUMBER TILES


MATERIALS

Nine [9] tiles numbered 1 – 9


1. Place the tiles onto the squares so that they make a correct addition sum. *It can be done!*



+



2. There are many solutions. Try to find five [5] more.



$$\begin{array}{r} 3 \square \\ + 1 \square \\ \hline \square 2 \end{array}$$

What might the missing numbers be?
Write down as many
can.

possibili